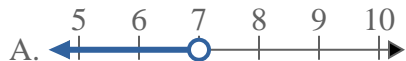


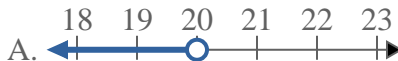


Solve each problem.

1) Which option best shows $X \leq 7$



2) Which option best shows $X > 20$



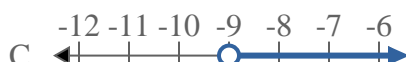
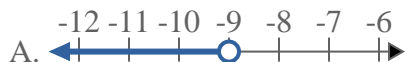
3) Which option best shows $X \leq 11$



4) Which option best shows $X < 8$



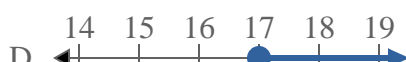
5) Which option best shows $X > -9$



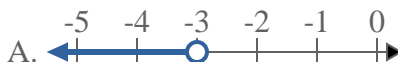
6) Which option best shows $X \leq 15$



7) Which option best shows $X \leq 17$



8) Which option best shows $X \leq -3$



Answers

1. _____

2. _____

3. _____

4. _____

5. _____

6. _____

7. _____

8. _____



Solve each problem.

1) Which option best shows $X \leq 7$



2) Which option best shows $X > 20$



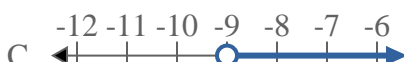
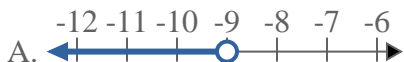
3) Which option best shows $X \leq 11$



4) Which option best shows $X < 8$



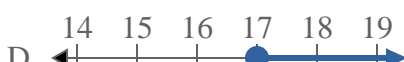
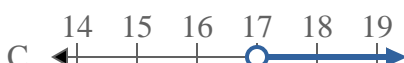
5) Which option best shows $X > -9$



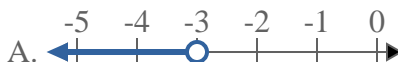
6) Which option best shows $X \leq 15$



7) Which option best shows $X \leq 17$



8) Which option best shows $X \leq -3$



Answers

1. **B**

2. **C**

3. **B**

4. **A**

5. **C**

6. **B**

7. **B**

8. **B**